

How Many Pennies?

Directions:

Count coins to make an equal amount.

Materials:

30 pennies (or print these pennies and cut out on the dotted lines)



Reference:

A penny



= 1¢

A dime



= 10¢

A nickel





= 5¢

A quarter




= 25¢


How many pennies are equal to a nickel?

	<p>Count, draw, or place pennies here</p> 	<p>How many?</p> <hr/>
---	---	------------------------



How many pennies are equal to a dime?

	<p>Count, draw, or place pennies here</p>	<p>How many?</p> <hr/>
---	---	------------------------



How many pennies are equal to a quarter?

	<p>Count, draw, or place pennies here</p>	<p>How many?</p> <hr/>
---	---	------------------------



How many pennies are equal to 2 nickels?

	<p>Count the pennies</p> 	<p>How many?</p> <hr/>
---	---	------------------------


How many pennies are equal to 3 nickels?

	<p>Count the pennies and add the coins needed</p>  <hr/> <hr/> <hr/> <hr/> <hr/> <hr/>	<p>How many?</p> <hr/>
--	--	------------------------


How many pennies are equal to 2 dimes?

	<p>Count the pennies and add the coins needed</p>  <hr/> <hr/> <hr/> <hr/> <hr/> <hr/> <hr/> <hr/> <hr/> <hr/>	<p>How many?</p> <hr/>
---	---	------------------------

How many pennies are equal to 3 dimes?

	<p>Count or draw the pennies</p> <p>____, ____ , ____ , ____ , ____ , ____ , ____ , ____ , ____ , ____ , ____ ,</p> <p>____, ____ , ____ , ____ , ____ , ____ , ____ , ____ , ____ , ____ , ____ ,</p> <p>____, ____ , ____ , ____ , ____ , ____ , ____ , ____ , ____ , ____ , ____ ,</p>	<p>How many?</p> <p>_____</p>
---	---	-------------------------------

How many pennies are equal to 2 quarters?

	<p>Count or draw the pennies (you will not have enough)</p>	<p>How many?</p> <p>_____</p>
--	---	-------------------------------

BONUS QUESTION

This is a **half dollar**. It is equal to **50¢**.
How many pennies are equal to a half dollar?



= _____ pennies